
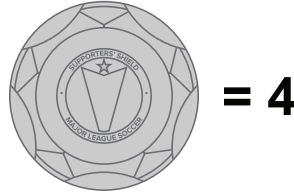









# COMPLETE THE MATH PROBLEMS BELOW



1.  +  =

2.  x  =

3.  -  =

4.  +  +  =

1. 9  
2. 8  
3. 7  
4. 12

# KEY

# MATH PROBLEMS